



Desafíos Matemáticos

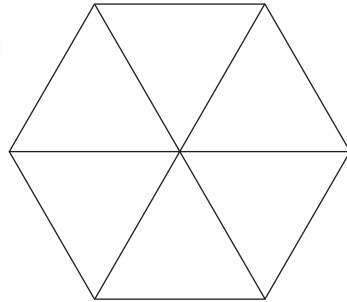
Tercer grado

Consigna

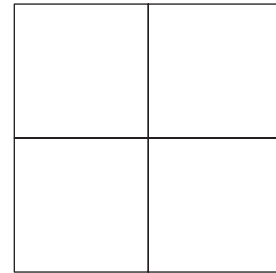
En equipos, realicen lo que se solicita.

1. Coloreen la parte que se indica en cada figura.

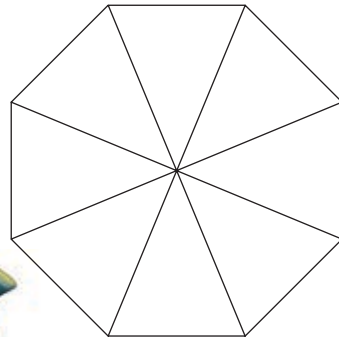
a) $\frac{2}{6}$ de la figura.



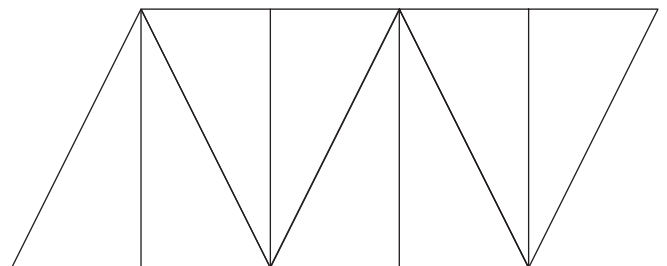
b) $\frac{3}{4}$ de la figura.



c) $\frac{5}{8}$ de la figura.

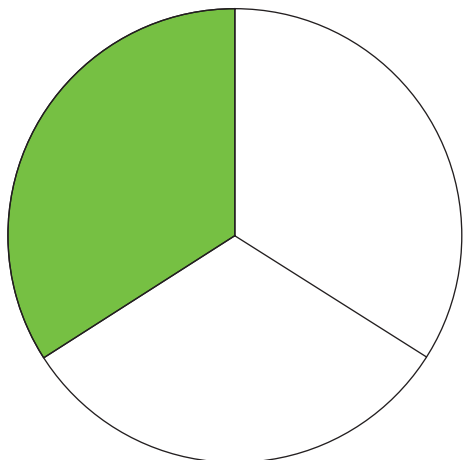


d) $\frac{1}{8}$ de la figura.




2. Identifiquen y escriban qué parte de las siguientes figuras está sombreada.


a)




b)



c)

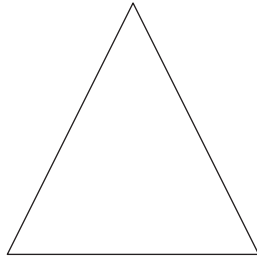


d)




3. Coloreen la parte que se solicita para cada figura y justifiquen su respuesta.

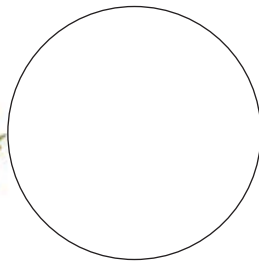
a) $\frac{1}{2}$ de la figura.



b) $\frac{1}{4}$ de la figura.



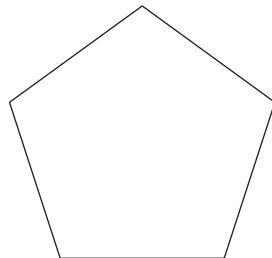
c) $\frac{3}{4}$ de la figura.



d) $\frac{6}{8}$ de la figura.



e) $\frac{1}{5}$ de la figura.



f) $\frac{3}{12}$ de la figura.

